

Bear Subtraction

Write down the answers in the circles.




$$- 2 = \bigcirc$$




$$- 4 = \bigcirc$$



$$- 1 = \bigcirc$$



$$- 5 = \bigcirc$$



$$- 3 = \bigcirc$$




$$- 6 = \bigcirc$$



$$- 8 = \bigcirc$$



$$- 7 = \bigcirc$$



$$- 9 = \bigcirc$$

Bear Subtraction

Write down the answers in the circles.




$$- 7 = \bigcirc$$



$$- 6 = \bigcirc$$



$$- 5 = \bigcirc$$




$$- 4 = \bigcirc$$



$$- 2 = \bigcirc$$




$$- 10 = \bigcirc$$



$$- 9 = \bigcirc$$



$$- 7 = \bigcirc$$



$$- 8 = \bigcirc$$